

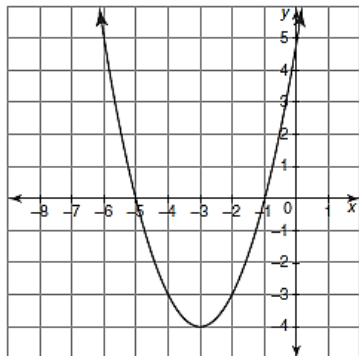
Day 7 – Writing Equations of Parabolas
Practice Assignment

Name: _____

Date: _____ Block: _____

Directions: Write the equation of each parabola in vertex, standard, and intercept form.

1.

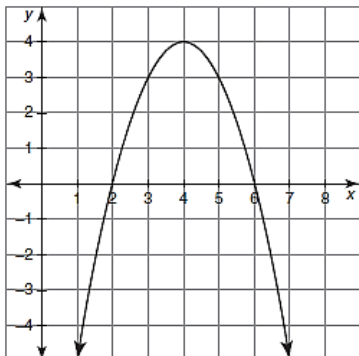


Vertex Form:

Intercept Form:

Standard Form:

2.

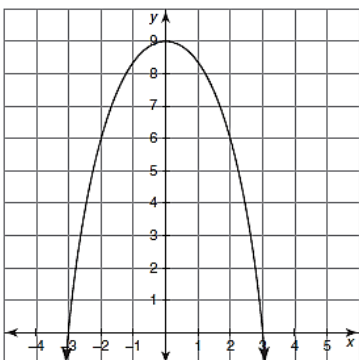


Vertex Form:

Intercept Form:

Standard Form:

3.

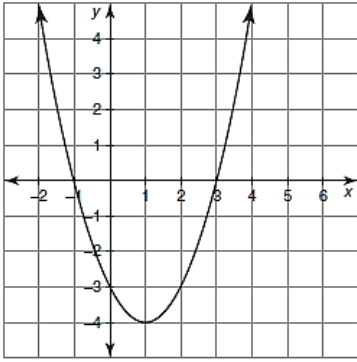


Vertex Form:

Intercept Form:

Standard Form:

4.

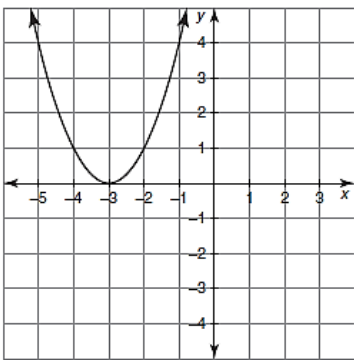


Vertex Form:

Intercept Form:

Standard Form:

5.

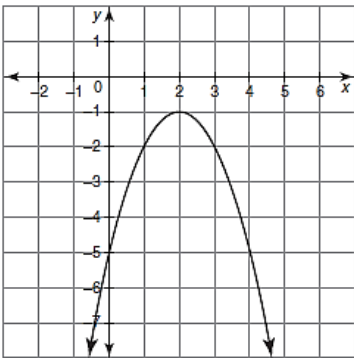


Vertex Form:

Intercept Form:

Standard Form:

6.

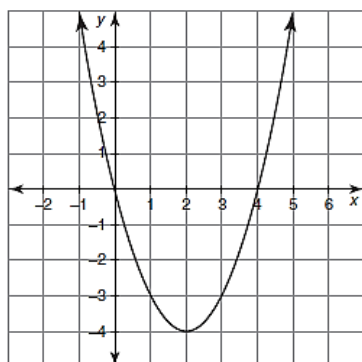


Vertex Form:

Intercept Form:

Standard Form:

7.



Vertex Form:

Intercept Form:

Standard Form: